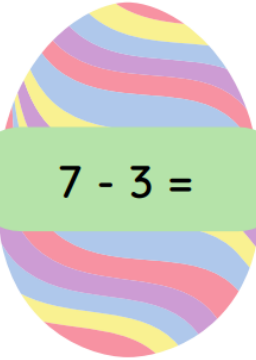
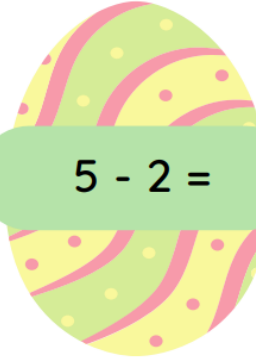
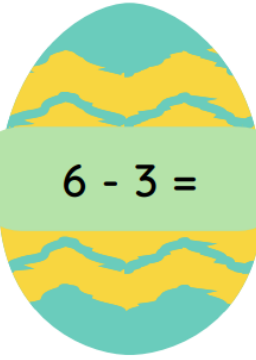


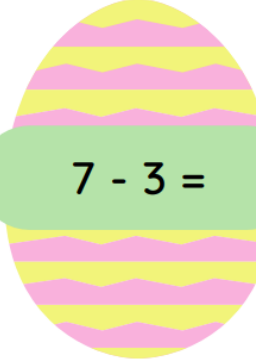
P A A S V A K A N T I E
B U N D E L

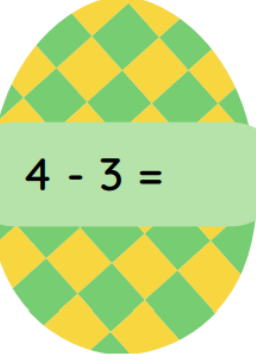
N A A M:


 $7 - 3 =$

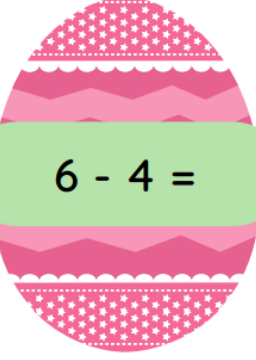
 $5 - 2 =$

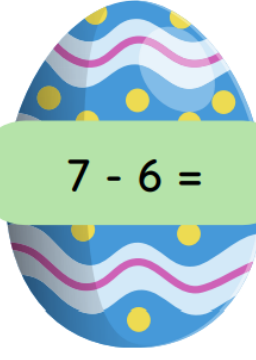
 $6 - 3 =$

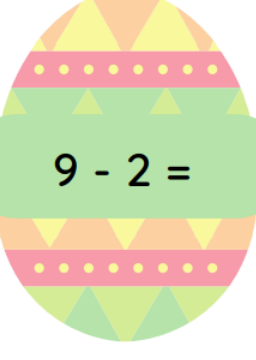
 $7 - 3 =$

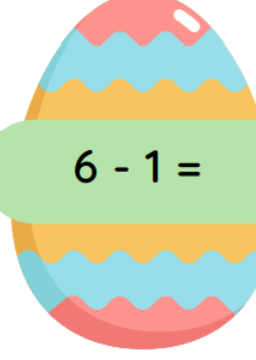
 $4 - 3 =$

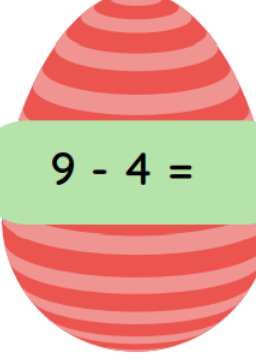
 $3 - 1 =$

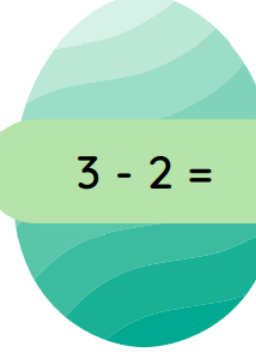
 $6 - 4 =$

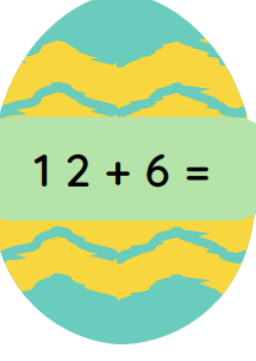
 $7 - 6 =$

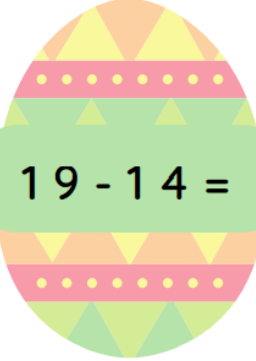
 $9 - 2 =$

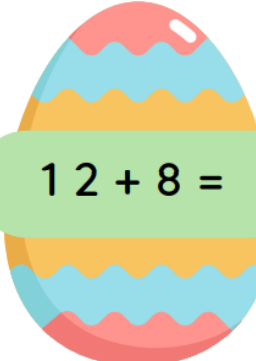
 $6 - 1 =$

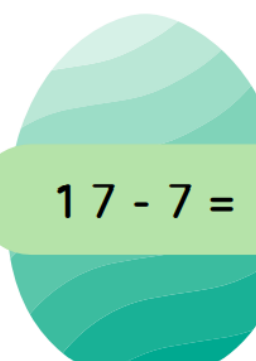
 $9 - 4 =$


 $3 - 2 =$

 $12 + 6 =$

 $19 - 14 =$

 $12 + 8 =$

 $17 - 7 =$



optellen en aftrekken tot 10

$4 + 3 = \square$

$8 + 1 = \square$

$4 - 4 = \square$

$7 - 5 = \square$

$8 + 0 = \square$

$5 + 5 = \square$

$10 - 2 = \square$

$2 - 1 = \square$

$6 - 3 = \square$

$4 + 4 = \square$

$5 + 5 = \square$

$10 - 3 = \square$

$6 + 4 = \square$

$2 + 6 = \square$

$4 + 4 = \square$

$4 + 5 = \square$

$9 - 6 = \square$

$10 - 7 = \square$

$8 - 3 = \square$

$7 + 2 = \square$

$4 + 3 = \square$

$8 + 2 = \square$

$1 + 5 = \square$

$10 - 9 = \square$

$7 - 3 = \square$


$5 - 5 = \square$

$6 + 3 = \square$

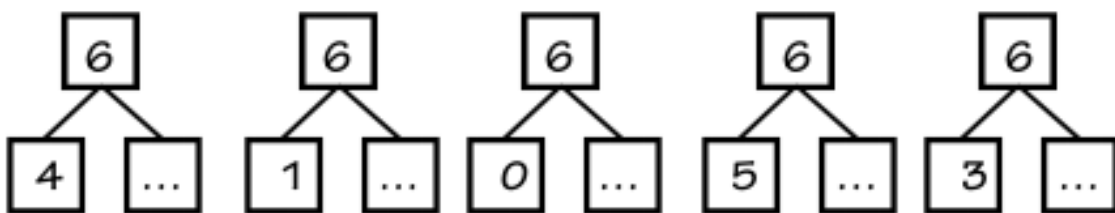
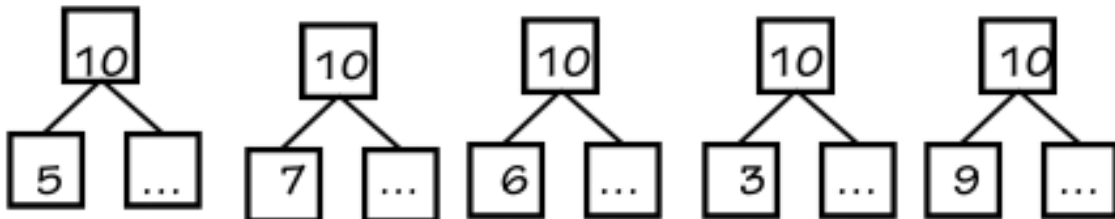
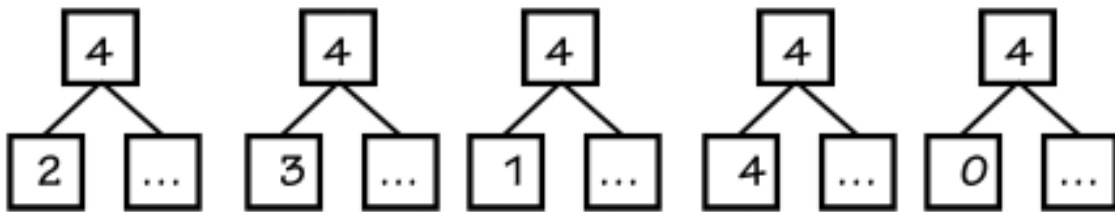
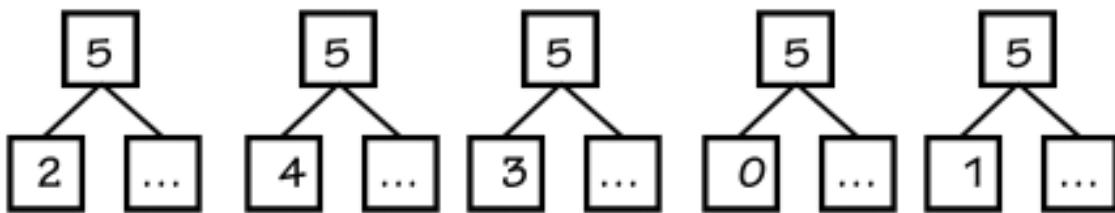
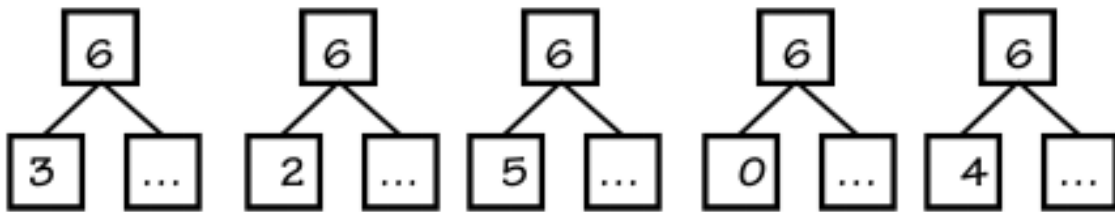
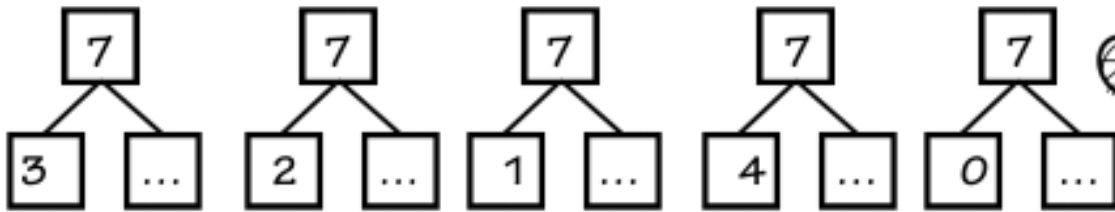
$8 - 6 = \square$

$7 + 3 = \square$

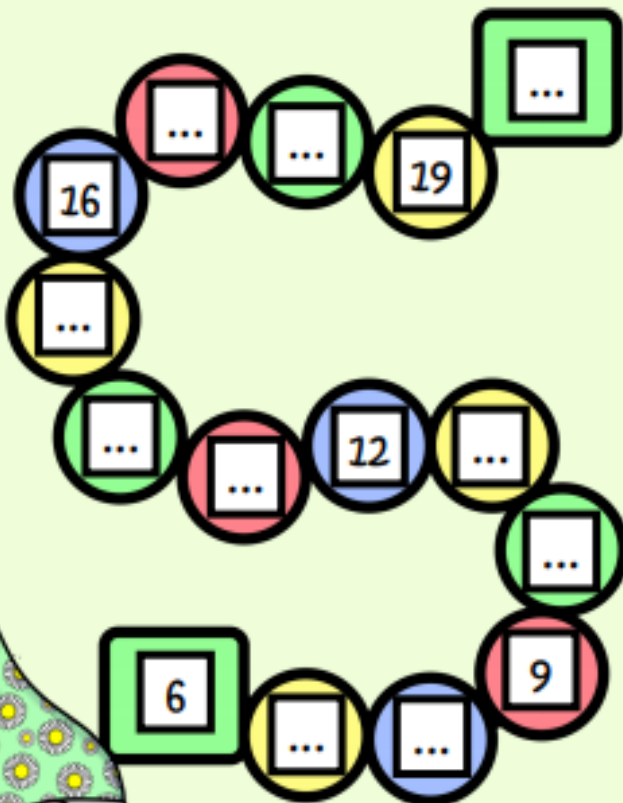
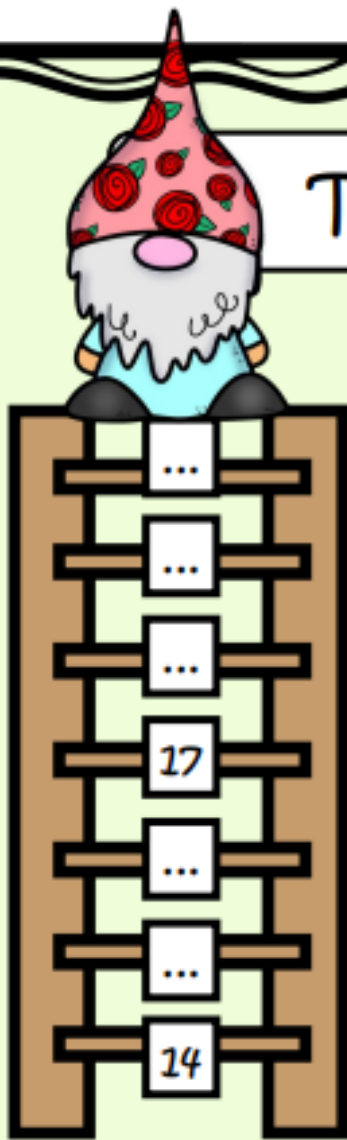
$7 - 3 = \square$



plitsen maar!!



Tellen tot 20.



Vul in.

$12 + 6 = \dots\dots\dots$

$5 + 11 = \dots\dots\dots$

$4 + 14 = \dots\dots\dots$

$13 + 5 = \dots\dots\dots$

$3 + 14 = \dots\dots\dots$

$2 + 17 = \dots\dots\dots$

$15 + 5 = \dots\dots\dots$

$6 + 11 = \dots\dots\dots$



$18 + 2 = \dots\dots\dots$

$4 + 12 = \dots\dots\dots$

$16 + 3 = \dots\dots\dots$

$3 + 13 = \dots\dots\dots$



$6 + 11 = \dots\dots\dots$

$5 + 14 = \dots\dots\dots$

$7 + 12 = \dots\dots\dots$

$12 + 5 = \dots\dots\dots$



Vul in.

$9 - 7 = \dots\dots$

$19 - 7 = \dots\dots$

$8 - 3 = \dots\dots$

$18 - 3 = \dots\dots$

$7 - 5 = \dots\dots$

$17 - 5 = \dots\dots$

$6 - 4 = \dots\dots$

$16 - 4 = \dots\dots$

$3 - 2 = \dots\dots$

$13 - 2 = \dots\dots$

$5 - 3 = \dots\dots$

$15 - 3 = \dots\dots$

$9 - 6 = \dots\dots$

$19 - 6 = \dots\dots$

$8 - 6 = \dots\dots$

$18 - 6 = \dots\dots$

$7 - 4 = \dots\dots$

$17 - 4 = \dots\dots$

$9 - 5 = \dots\dots$

$19 - 5 = \dots\dots$



Alles door elkaar.



$19 - 7 = \dots\dots\dots$

$5 + 15 = \dots\dots\dots$

$14 - 2 = \dots\dots\dots$

$12 + 3 = \dots\dots\dots$



$17 - 7 = \dots\dots\dots$

$9 + 10 = \dots\dots\dots$

$16 - 4 = \dots\dots\dots$

$15 + 3 = \dots\dots\dots$



$11 + 8 = \dots\dots\dots$

$19 - 6 = \dots\dots\dots$

$3 + 14 = \dots\dots\dots$

$17 - 5 = \dots\dots\dots$



$6 + 12 = \dots\dots\dots$

$16 - 5 = \dots\dots\dots$

$13 + 7 = \dots\dots\dots$

$10 - 4 = \dots\dots\dots$



Maak mooie zinnen, begin met het onderstreepte woord!



speel - in de tuin - ik



een bloem - in het gras - bloeit


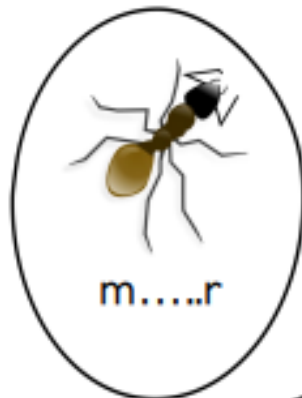
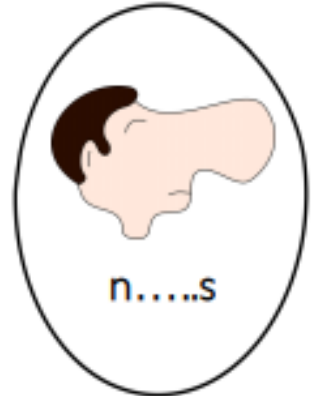


staat - de zon - in de lucht - hoog



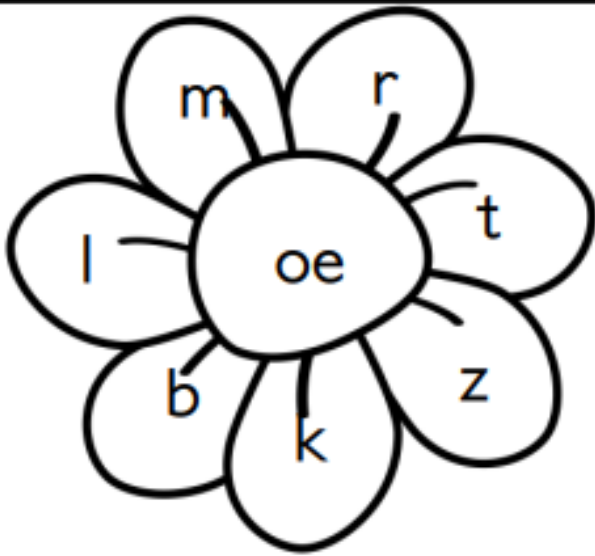
het - leuk - in de tuin - is - heel

Geef de eitjes het juiste kleur



juf Tine

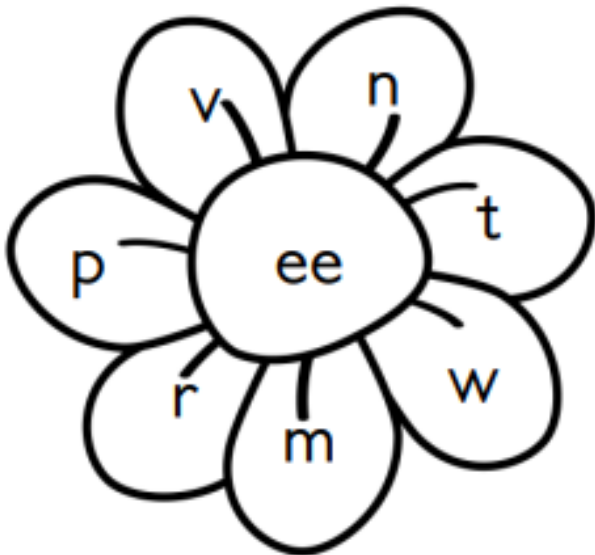
Hoeveel woordjes kan je maken? kopje buikje staartje
Vind je 7 woordjes met oe en 7 woordjes met ee?



| |
|--|
| |
| |
| |
| |
| |
| |

| |
|--|
| |
| |
| |
| |
| |
| |
| |

| |
|--|
| |
| |
| |
| |
| |
| |



| |
|--|
| |
| |
| |
| |
| |
| |

| |
|--|
| |
| |
| |
| |
| |
| |
| |

| |
|--|
| |
| |
| |
| |
| |
| |

Vind je het woord? Schrijven maar!

naam:





naam:



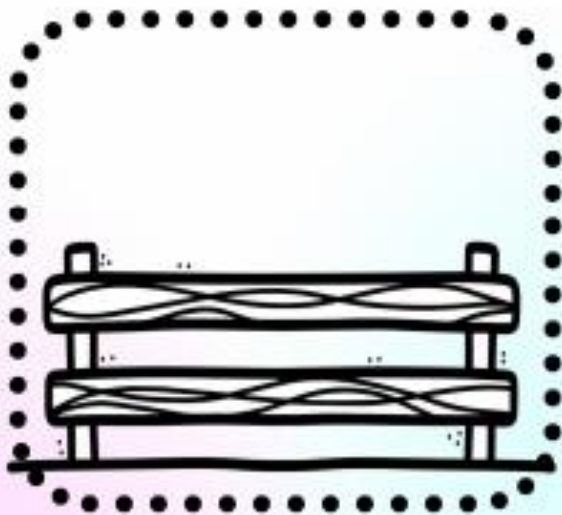
Teken wat ontbreekt.



De haas staat op een ei.



Je ziet vier ei-tjes.




Op het hek staat een kip.



De strik is geel.





Schrijf het woord.

naam:

